


VIDYA NIKETAN (BIRLA PUBLIC SCHOOL), PILANI (RAJ.)



BIRLA EDUCATION TRUST, PILANI (RAJASTHAN)

COMMON SCHOLASTIC ASSESSMENT

For Admission to Class-V

SUBJECTS: HINDI, ENGLISH, MATHEMATICS, APTITUDE TEST

Maximum Time: 2.00 Hours

Maximum Marks: 100

(To be filled in by the candidate)

Name of the Candidate:

Father's Name:

Studying in Class:

Class in which admission is sought:

Name of Examination Centre:

Mobile No.:

[For Office Use Only]

1. Invigilator's Signature

.....

2. Signature of Examiner

.....

Hindi	
English	
Mathematics	
Aptitude	
TOTAL	

CLASS: 5
SUBJECT: HINDI
SET: 1

TIME:-30minuts

M.M. :- 25

प्र. 1 दिये गए गद्यांश को पढ़कर प्रश्नों के सही उत्तर लिखिए -

5

बारिश भी क्या चीज है। सब ओर धुला-धुला-सा भीगापन! पौधों की हरी-भरी टहनियाँ शरमाई-सी नीचे की ओर झुकी रहती हैं। उनका निखरा-निखरा सौंदर्य किसी नई सृष्टि की रचना करता-सा लगता है। ये पौधे हमेशा सबके हृदय में नई उमंगें भर जाते हैं। मन पानी की एक बूँद पाने के लिए चातक पक्षी की तरह चोंच खोलकर इधर-उधर भटकता रहता है। सावन की पहली बूँद गिरने से चातक को भी संतोष मिलता है। यह सुख तो वही जान सकता है जो ज्येष्ठ की गरमी में तपा हो।

1. बारिश में पौधों की टहनियाँ कैसी रहती हैं?

क. नीचे की ओर झुकी

ख. ऊपर उठी हुई

ग. खुली हुई

घ. टेढ़ी हुई

2. मन किसकी भाँति इधर-उधर भटकता है?

क. चातक

ख. जयशंकर

ग. हिमालय

घ. सावन

3. चातक के संतोष को कौन जान सकता है?

क. हिमालय

ख. हिमगिरी

ग. जो ज्येष्ठ की गरमी में तपा हो।

घ. माउन्ट एवरेस्ट

4. सबके हृदय में नई उमंगें, कौन भर जाते हैं।

क. पौधे

ख. हवा

ग. पक्षी

घ. गुब्बारा

5. 'बारिश' शब्द का पर्यायवाची क्या होगा -

क. वर्षा

ख. मेह

ग. उपर्युक्त दोनों

घ. कोई नहीं

प्र. 2. सही वर्तनी वाले शब्द छाँटिए :-

2

क.	कृपा	क्रिपा
ख.	आशीरवाद	आशीर्वाद
ग.	अहार	आहार
घ.	क्योंकि	क्यूंकि

प्र. 3. निम्नलिखित शब्दों के सही पर्यायवाची चुनकर ✓ का निशान लगाइए - 2

(क) पेड़

तनी [] नीड़ [] वृक्ष [] आलय []

(ख) आकाश

आसमान [] मेह [] वाटिका [] जलधि []

प्र. 4. दिए गए वाक्यांशों का सही शब्द चुनिए - 2

(क) जिसके माता - पिता न हो -

अनाथ [] सनाथ [] आराम [] जलचर []

(ख) काम से जी चुराने वाला -

कामचोर [] जलचर [] अमर [] नभचर []

प्र. 5. एक-दूसरे के उल्टे शब्दों कोकहते हैं। 1

अ. विलोम शब्द ब. शब्द-युग्म स. समानार्थी शब्द द. विशेषण

प्र. 6. निम्नलिखित में से कौन-सा विकल्प सही विलोम का जोड़ा नहीं है? 1

अ. मोटा-पतला ब. यश-अपयश स. राजा-रंक द. पक्ष-पक्षी

प्र. 7. निम्नलिखित में से 'ऋ' की मात्रा वाला शब्द कौन-सा है? 1

अ. मृग ब. व्रत स. पर्व द. ट्रक

प्र. 8. 'हिमालय सबसे ऊँचा पर्वत है।' वाक्य में रेखांकित संज्ञा का भेद बताइए। 1

अ. व्यक्तिवाचक ब. भाववाचक स. जातिवाचक द. संबोधन

प्र. 9. नीचे दिए गए चित्र को देखकर पाँच वाक्य लिखो - 5

5

[illegible]

CLASS - V

TIME: 30 Mins

SUBJECT - ENGLISH

MARKS - 25

1. Rearrange these words to make meaningful sentences and punctuate the following: - (5x1=5)

i. have a i parrot pet

ii. like to eat fish flamingoes

iii. holiday is Sunday a

iv. the cart horse the pulled

v. frock new Pooja wore a

2. Fill in the blanks with has or have:-

(5x1½=2½)

i. Mr. Nair _____ bought a new car.

ii. John and Kate _____ gone to school.

iii. A monkey _____ a tail.

iv. Reeta _____ a bicycle.

v. Anjum and Ameena _____ a garden at home.

3. Fill in the blanks with adverbs from the box:-

(5x1½=2½)

i. I am going to Varanasi _____

ii. We should _____ help the needy.

iii. A snail walks _____

iv. Tina finished her homework _____

v. The mother asked the children to come _____

always
quickly
inside
tomorrow
slowly

4. Match the columns to complete these sentences. Rewrite these sentences and underline the prepositions:- (5x½=2½)

- | | |
|----------------------------|----------------|
| i. The river flows under | the cliff |
| ii. Birds are flying in | the bridge |
| iii. There was a temple on | the two trucks |
| iv. The car raced between | the chair |
| v. There was a ball beside | the sky |

5. Circle the conjunctions in the following sentences:- (5x½=2½)

- i. Is the bag red or blue?
- ii. I like roses and lilies.
- iii. Sheetal is tall but Rajat is short.
- iv. Anjali wore a pink and blue dress.
- v. Payal saw a rainbow in the sky and jumped with joy.

6. Read the following passage and answer the questions:- (5x1=5)

Shetty the magician was returning home, when all of a sudden it began to rain. It rained heavily. Shetty looked around for shelter and saw a pretty little fir tree. He ran towards it as fast as he could.

The sad fir tree had leaves like needles and no birds ever made their nests on it. So it said, "I wish I had green leaves like my other friends."

- i. Where was the magician going?

- ii. What happened suddenly?

iii. Why was the fir tree sad?

iv. What did the fir tree wish for?

v. Find and write two adjectives from the passage.

a. _____ b. _____

7. Imagine the scene and write a short paragraph in about 25 words using your creativity. (5 Marks)



CLASS: V
SUBJECT: MATHS

Time : 30 min.

M.M. 25

Note: Attempt all questions, Q1. to Q15. carry 1 mark each & Q16. to Q20. carry 2 marks each.

Tick the correct option

Q1. The greatest three digit number is.....

- (a) 909 (b) 888 (c) 111 (d) 999

Q2. The roman numeral for 50 is

- (a) C (b) L (c) M (d) X

Q3. The place value of 5 in 7560 is

- (a) 5 (b) 500 (c) 50 (d) None of these

Q4. 2 hours =.....minutes

- (a) 30 (b) 60 (c) 130 (d) 120

Q5. $7000 + 30 + 9 = \dots\dots\dots$

- (a) 7309 (b) 7039 (c) 7390 (d) 7000309

Fill in the blanks

Q6. Predecessor of 1000 is.....

Q7. Write in words : 70532

.....

Q8. 5kg =grams

Q9. $4592 \div 100$; Quotient =..... , Remainder =

Q10. A triangle has sides.

Q11. Half of 16 apples =.....

Q12. If $x=10$ students then $2x = \dots\dots\dots$ students

Q13. $10 \times 23 = 230$ then $100 \times 23 = \dots\dots\dots$

Q14. $236 \times 0 = \dots\dots\dots$

Q15. Half metre = $\dots\dots\dots$ cm

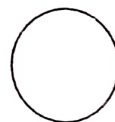

Q16. Evaluate: $4037 + 303 + 2060$

Q17. Divide 3913 by 13

Q18. If cost of 1 shirt is Rs 358 then, find the cost of 20 shirts.

Q19. A school has 2750 students, out of these 1809 are girls. How many of the children are boys?

Q20. Name the following figures



(a).....

(b).....

(c)

(d)

GK QUESTIONS FOR ADMISSION TEST (GRADE V)

Session 2025-26

SET - I

Marks:25

Time: 30 mins

1. Name the 4th planet of our solar system?
a) Earth b) Mars c) Jupiter d) Venus
2. Which animal can live without drinking water for many days?
a) Horse b) Elephant c) Camel d) Tiger
3. Name one plant which grows in the desert?
a) Sal b) Rubber c) Cactus d) Rhododendron
4. Which city is called Pearl city?
a) Bangalore b) Hyderabad c) Kolkata d) Kerala
5. P V Sindhu is associated with which sport?
a) Tennis b) Badminton c) Cricket d) Karate
6. 26th January is celebrated as:
a) Independence day b) Republic day c) Martyr's day d) None
7. How many consonants are there in the English alphabet?
a) 22 b) 21 c) 24 d) 25
8. A football team consists of how many players?
a) 12 b) 11 c) 9 d) 10
9. What is the name of the closest star to Earth?
a) Moon b) Mars c) Sun d) Jupiter
10. What is largest organ in the human body?
a) Heart b) Lungs c) Skin d) Liver
11. What is the capital city of Japan?
a) Sanghai b) Tokyo c) Korea d) Singapore
12. How many states are there in India?
a) 28 b) 26 c) 27 d) 25
13. Which country recently hosted the 2024 Summer Olympics?
a) USA b) India c) France d) China
14. Who is the current Prime minister of India?
a) Narendra Modi b) Atal Bihari Bajpai c) Rahul Gandhi d) None
15. Which gas do humans breathe out when they exhale?
a) Nitrogen b) Oxygen c) Carbon di oxide d) Helium
16. How many satellites does Earth have?
a) One b) Two c) Three d) Four

17. Which planet is called 'Evening star' or 'Morning star' and is often visible in the evening and morning sky?
a) Mars b) Mercury c) Venus d) Jupiter
18. Who is the only Indian male boxer to win a medal at the Olympics?
a) Vijender Singh b) Manoj Kumar c) Mary Kom d) Vikas Yadav
19. What is the sum of $130+125+191$?
a) 335 b) 456 c) 446 d) 426
20. What is the next prime number after 5?
a) 7 b) 8 c) 9 d) 6
21. Name the star which indicates the north is called:
a) Pole star b) Sun c) Moon d) None
22. Name one crop of Assam that is very famous?
a) Rice b) Tea c) Wheat d) Coffee
23. Where does the digestion of protein start in our body?
a) Liver b) Appendix c) Intestine d) Kidney
24. Name the sport with bat, ball and wicket.
a) Football b) Basketball c) Cricket d) Handball
25. Delhi is situated on the river bank of:
a) Ganga river b) Yamuna river c) Sutlej river d) Indus river